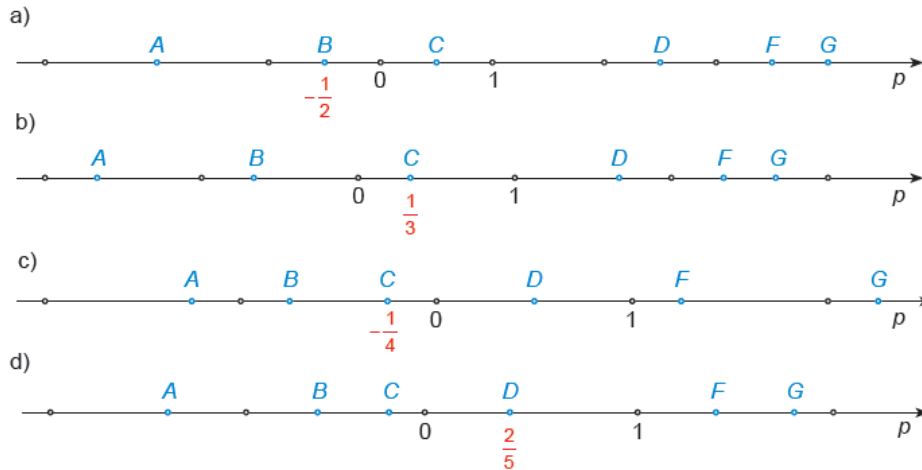
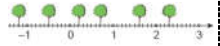
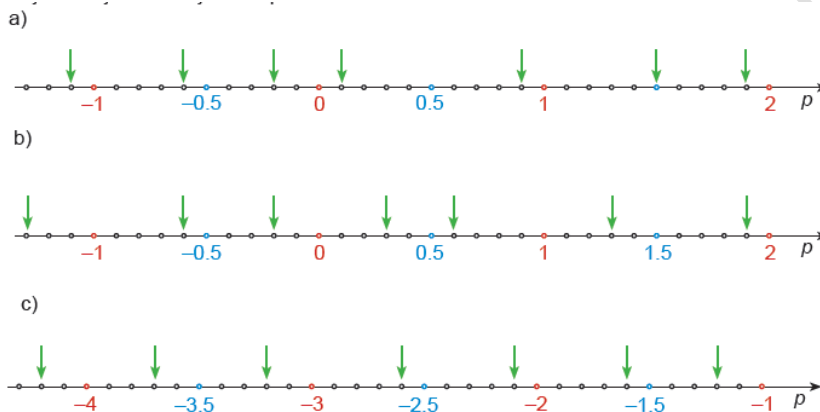


1. Točkama A, B, C, D, F i G pravca sa slike pridruži odgovarajuće racionalne brojeve.



2. Koji su brojevi na brojevnom pravcu označeni strelicom?



3. Prikaži na brojevnom pravcu:

a) $-\frac{1}{2}, \frac{3}{2}, -\frac{3}{4}, \frac{5}{4}, -2, -1\frac{1}{4}$

b) $1.7, -2.9, -4.2, 0.5, 3.6, -0.9$

c) $\frac{3}{4}, -\frac{1}{2}, -\frac{7}{4}, 1.5, -1$

d) $-\frac{12}{5}, -1.8, -\frac{6}{5}, -0.4, \frac{2}{5}, \frac{7}{5}, 2.1$